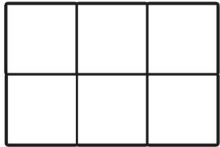


Date _____

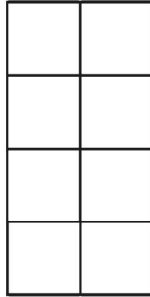
Name _____

Equivalent Fractions $\frac{1}{2}$

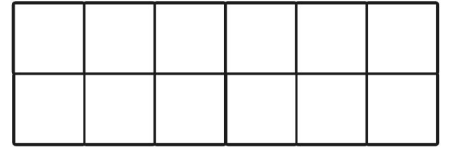
Shade $\frac{1}{2}$ of each shape. Look at how many squares are shaded (numerator) and the total amount of squares (denominator) and write the equivalent fraction underneath.



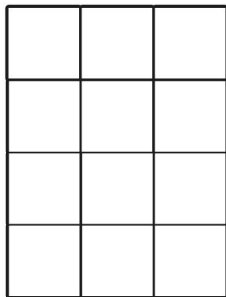
1. _____



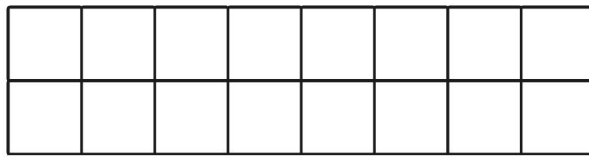
2. _____



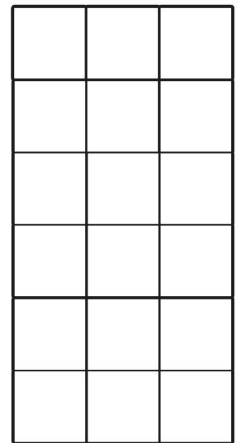
3. _____



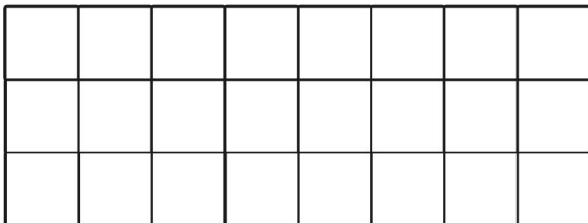
4. _____



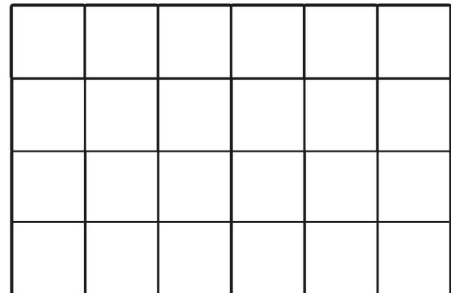
5. _____



6. _____



7. _____



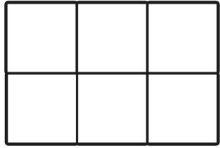
8. _____

Date _____

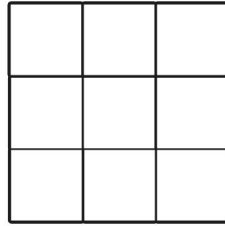
Name _____

Equivalent Fractions $\frac{1}{3}$

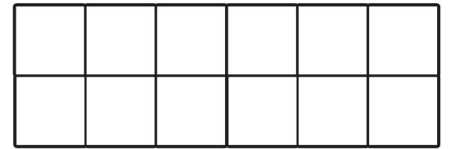
Shade $\frac{1}{3}$ of each shape. Look at how many squares are shaded (numerator) and the total amount of squares (denominator) and write the equivalent fraction underneath.



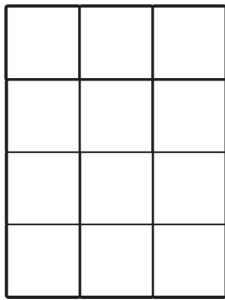
1. _____



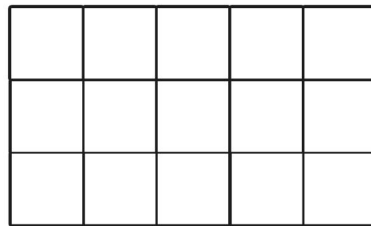
2. _____



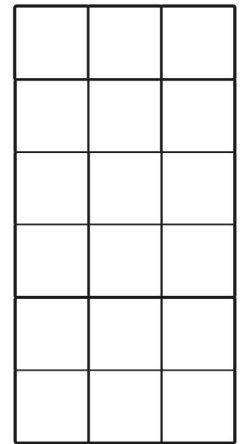
3. _____



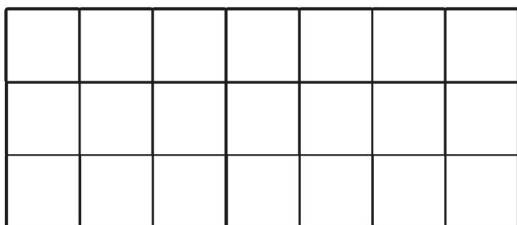
4. _____



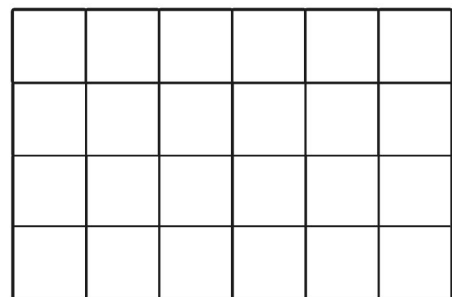
5. _____



6. _____



7. _____



8. _____

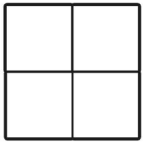
The unshaded squares show $\frac{2}{3}$. Write the equivalent fractions:

Date _____

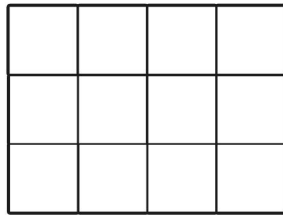
Name _____

Equivalent Fractions $\frac{1}{4}$

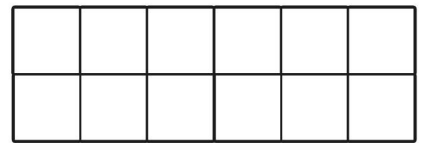
Shade $\frac{1}{4}$ of each shape. Look at how many squares are shaded (numerator) and the total amount of squares (denominator) and write the equivalent fraction underneath.



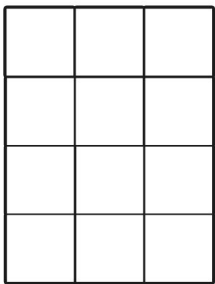
1. _____



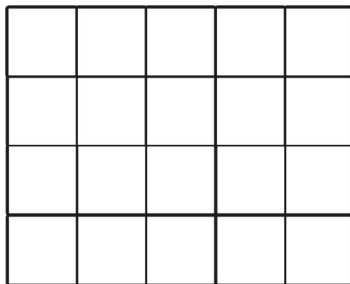
2. _____



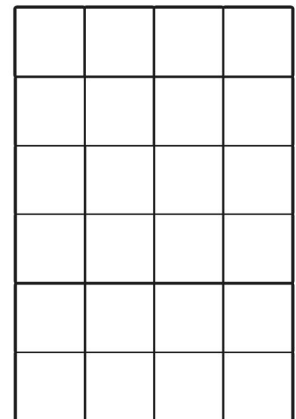
3. _____



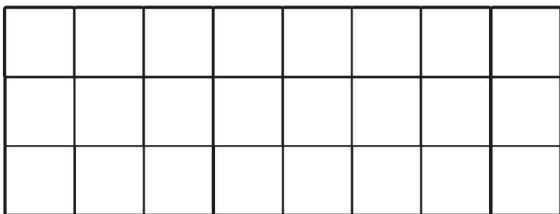
4. _____



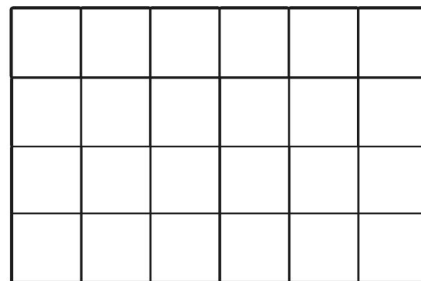
5. _____



6. _____



7. _____



8. _____

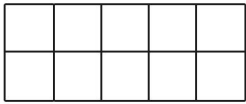
The unshaded squares show $\frac{3}{4}$. Write the equivalent fractions:

Date _____

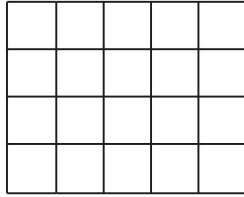
Name _____

Equivalent Fractions $\frac{1}{10}$

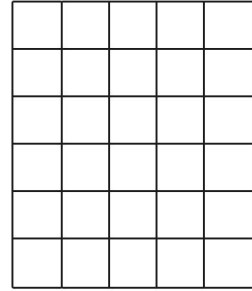
Shade $\frac{1}{10}$ of each shape. Look at how many squares are shaded (numerator) and the total amount of squares (denominator) and write the equivalent fraction underneath.



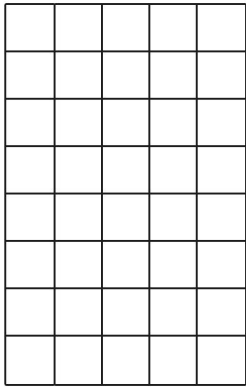
1. _____




2. _____




3. _____




4. _____




5. _____



6. _____



7. _____



8. _____


The unshaded squares show $\frac{9}{10}$. Write the equivalent fractions:

Date _____


Name _____

Equivalent Fractions $\frac{1}{100}$


Shade $\frac{1}{100}$ of each shape. Look at how many squares are shaded (numerator) and the total amount of squares (denominator) and write the equivalent fraction underneath.



1. _____



2. _____



3. _____

The unshaded squares show $\frac{99}{100}$. Write the equivalent fractions: